

# Evaluation diagnostique CE1 Septembre

Nom de l'élève:..... Ecole :.....  
 Prénom de l'élève:..... Année:.....  
 Classe de (Nom de l'enseignant):.....

## Exercice 1

### FRANCAIS PARTIE 1



chameau	chapeau	château
---------	---------	---------

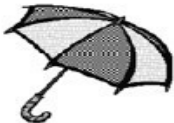
1



pile	pull	poule
------	------	-------

1

2



pantalon	parapluie	panthère
----------	-----------	----------

3



feuille	fleur	fille
---------	-------	-------

4




ballon	bâton	balai
--------	-------	-------

5

## Exercice 2



t...l...pe  
6



lap.....  
7



c.....ronne  
8



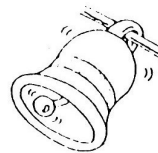
..... 9



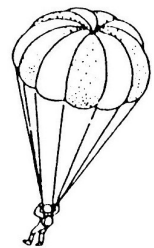
m.....tagne  
10



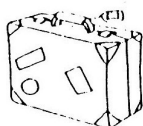
r.....  
11



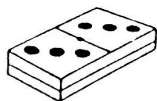
.....  
12



.....  
13



.....  
14



.....  
15



.....  
16







.....  
17







.....  
18

Exercice 3

☺





			
<input type="checkbox"/> <input type="checkbox"/>	<input type="checkbox"/> <input type="checkbox"/>	<input type="checkbox"/> <input type="checkbox"/> <input type="checkbox"/>	<input type="checkbox"/> <input type="checkbox"/> <input type="checkbox"/>

①

			
<input type="checkbox"/> <input type="checkbox"/>	<input type="checkbox"/> <input type="checkbox"/>	<input type="checkbox"/> <input type="checkbox"/> <input type="checkbox"/>	<input type="checkbox"/> <input type="checkbox"/>





19

②

			
<input type="checkbox"/> <input type="checkbox"/>	<input type="checkbox"/> <input type="checkbox"/>	<input type="checkbox"/> <input type="checkbox"/>	<input type="checkbox"/> <input type="checkbox"/> <input type="checkbox"/>





20

③

			
<input type="checkbox"/> <input type="checkbox"/>	<input type="checkbox"/> <input type="checkbox"/>	<input type="checkbox"/> <input type="checkbox"/> <input type="checkbox"/>	<input type="checkbox"/> <input type="checkbox"/>

21



④

			
<input type="checkbox"/> <input type="checkbox"/>	<input type="checkbox"/> <input type="checkbox"/>	<input type="checkbox"/> <input type="checkbox"/>	<input type="checkbox"/> <input type="checkbox"/> <input type="checkbox"/>

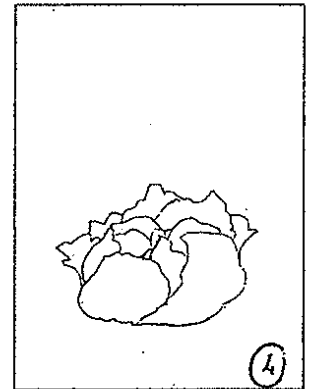


22

Exercice 4

23 24 25 26 27 28 29 30 31




**A**




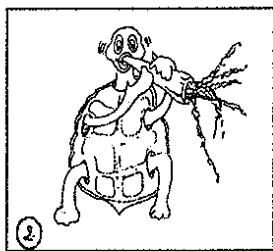
**B**



**C**



**D**



**Exercice 6**

**MATHEMATIQUES PARTIE 1**

A	
23	32

36

B	
52	57

37

C	
38	48

38

D	
Treize	Trente

39

E	
Cent	Cinquante

40

F		
80	78	79


41

**Exercice 7**

25 ●

●	2 dizaines et 5 unités	42
●	$10 + 10 + 5$	43
●	$2 + 5$	44
●	$20 + 5$	45
●	$10 + 5$	46

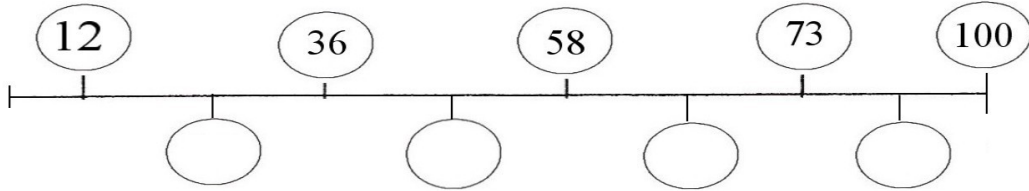
**Exercice 8**

	
<i>a</i>	
<i>b</i>	
<i>c</i>	
<i>d</i>	
<i>e</i>	

47  
48  
49  
50  
51

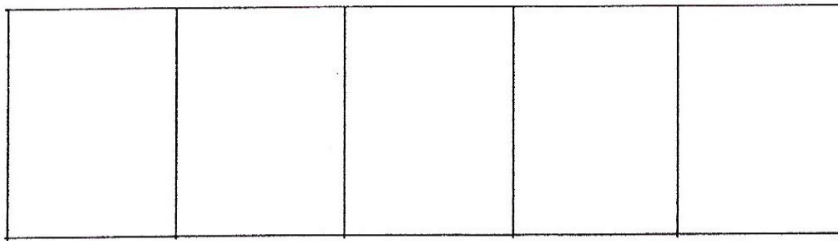
Exercice 9

Ecris à la bonne place les nombres 63, 21, 85, 37.



52.

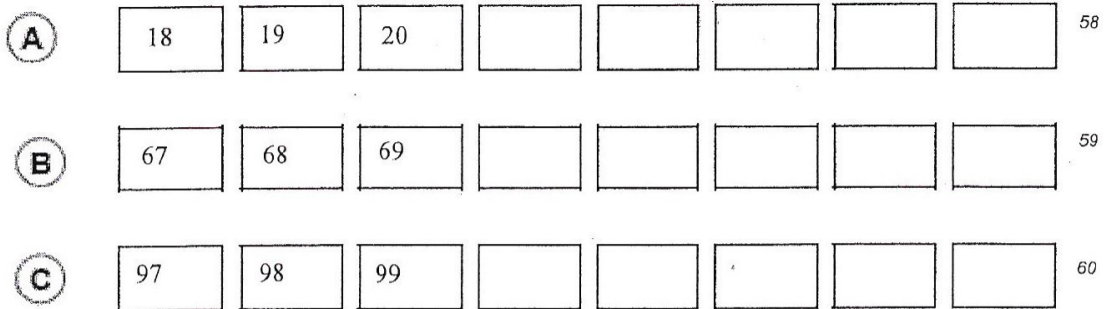
Exercice 10



7


53 54 55 56 57

Exercice 11



Exercice 12

FRANCAIS PARTIE 2



①	
Oui	Non

61

②	
Oui	Non

62

③	
Oui	Non

63

④	
Oui	Non

64

⑤	
Oui	Non

65

⑥	
Oui	Non

66

Exercice 13

**Le lapin sauvage**

La lapine peut avoir 4 à 10 petits à la fois.

Les petits naissent sans poils, les yeux fermés.

Ils têtent leur mère.

Le lapin mange de l'herbe et des légumes.

Pour échapper aux renards, aux chasseurs et aux chiens, il se réfugie dans son terrier.

67 68 69 70

Exercice 14

Le lapin mange de l'herbe.


**Exercice 15**

1      ni      nu      ir      mi      ri      in      un

77

2      saf      cot      sof      cof      kat      fas      sat

78

3      pro      bor      rod      bro      por      dro      dor

79

4      clon      glan      clou      oncl      ancr      ongl      clan

80

**Exercice 16**



Le vite. vélo roule

81

sucré le Papa gâteau. met du dans

82 83

**Exercice 17**



**Exercice 18**

87

**Exercice 19**

😊	14	34	104	41	
A	61	17	16	106	88
B	23	32	302	45	89
C	57	65	507	78	90
D	68	75	78	6018	91

**Exercice 20**

a		92
b		93
c		94
d		95
e		96
f		97

**Exercice 21**

(A) $21 + 6 =$	(B) $\begin{array}{r} 21 \\ + 14 \\ \hline \end{array}$
(C) $35 + 13$	(D) $\begin{array}{r} 57 \\ + 14 \\ \hline \end{array}$